


Name \_\_\_\_\_

Count the pictures in each row. How many are there?


1 2 3 4 5 6 7 8 9 10



\_\_\_\_\_




\_\_\_\_\_



\_\_\_\_\_



\_\_\_\_\_



\_\_\_\_\_